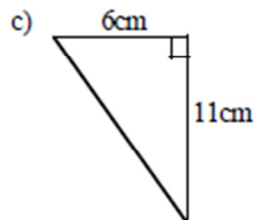
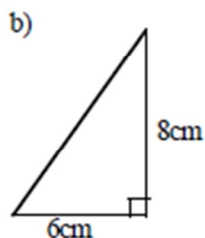
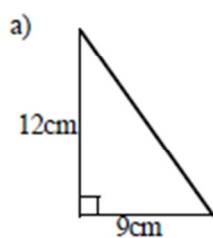
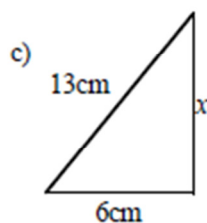
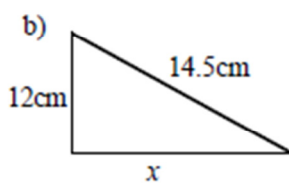
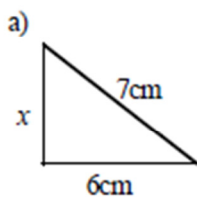


39 Pythagoras' Theorem

1) Calculate the length of the hypotenuse in each of the following triangles



2) Calculate the length of the side marked x in each of the following right angled triangles.



Answers on next page

39. Pythagoras Theorem

- 1) a. 15cm b. 10cm c. 12.53cm
- 2) a. 3.606cm b. 8.139cm c. 11.53cm